



# INDIAN SCHOOL NIZWA - WORKSHEET

## MATHEMATICS







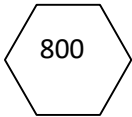
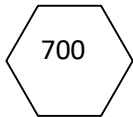

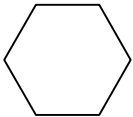
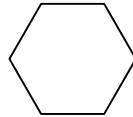
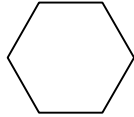

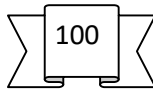

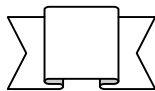
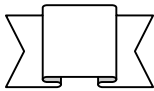
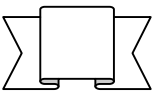
### CH:6 – FUN WITH GIVE AND TAKE

Name: \_\_\_\_\_

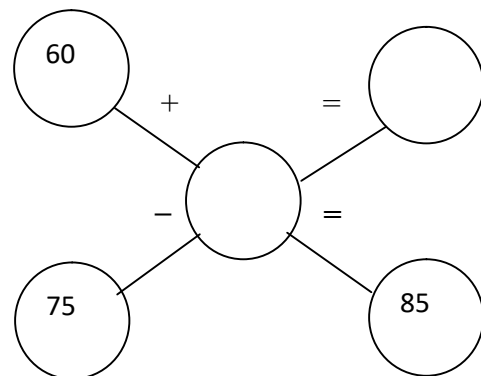
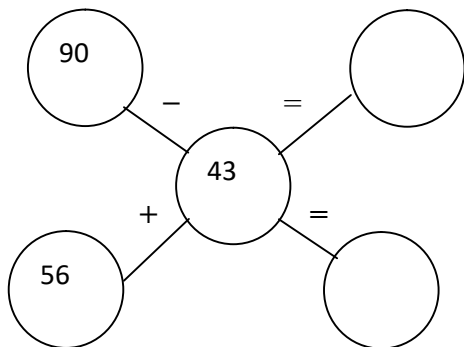
Date: \_\_\_\_\_

Class: III Sec: \_\_\_\_

1. Find the missing numbers:

2. Find the answers mentally:





# INDIAN SCHOOL NIZWA - WORKSHEET

3.

Solve the following:

a) Rakhi is 12 years old. Her mother is 38 years old. How much younger is Rakhi than her mother?

b) Sachin scored 186 runs in a test cricket match. How many more runs should he make to score a double century?

c) Raju bought a shirt for Rs. 135 and a trouser for Rs.189. how much money did he spend in all?



# INDIAN SCHOOL NIZWA - WORKSHEET

4. Solve:

$$\begin{array}{|c|c|c|} \hline 2 & 4 & 5 \\ \hline 1 & 3 & 2 \\ \hline & & \\ \hline \end{array}$$

+

$$\begin{array}{|c|c|c|} \hline 4 & 6 & 3 \\ \hline 2 & 5 & 8 \\ \hline & & \\ \hline \end{array}$$

—

$$\begin{array}{|c|c|c|} \hline 6 & 5 & 3 \\ \hline 2 & 2 & 4 \\ \hline & & \\ \hline \end{array}$$

+

$$\begin{array}{|c|c|c|} \hline 7 & 0 & 0 \\ \hline 4 & 3 & 8 \\ \hline & & \\ \hline \end{array}$$

—

5 Solve the following:

$$\begin{array}{r} 18 \\ - 9 \\ \hline \\ \hline \end{array}$$

$$\begin{array}{r} 14 \\ - 6 \\ \hline \\ \hline \end{array}$$

$$\begin{array}{r} 25 \\ - 8 \\ \hline \\ \hline \end{array}$$

$$\begin{array}{r} 63 \\ - 25 \\ \hline \\ \hline \end{array}$$

$$\begin{array}{r} 357 \\ - 139 \\ \hline \\ \hline \end{array}$$

$$\begin{array}{r} 450 \\ - 224 \\ \hline \\ \hline \end{array}$$

$$\begin{array}{r} 500 \\ - 315 \\ \hline \\ \hline \end{array}$$

$$\begin{array}{r} 604 \\ - 428 \\ \hline \\ \hline \end{array}$$